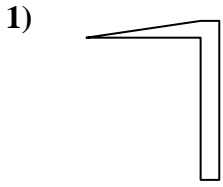


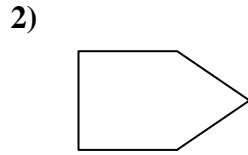


Determine which letter BEST represents the shapes that were used to create the figure shown.

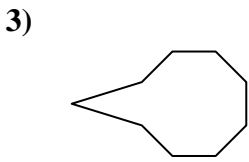
Answers



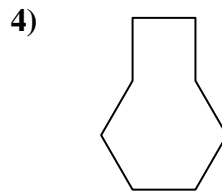
- A. hexagon & triangle
- B. rectangle & square
- C. hexagon & quadrilateral
- D. quadrilateral & triangle



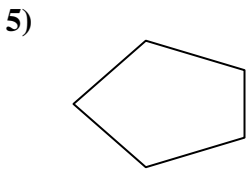
- A. hexagon & square
- B. heptagon & pentagon
- C. hexagon & rectangle
- D. square & triangle



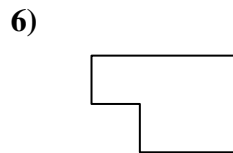
- A. square & triangle
- B. pentagon & quadrilateral
- C. triangle & octagon
- D. square & octagon



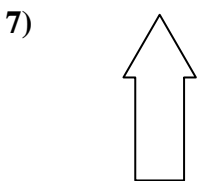
- A. quadrilateral & hexagon
- B. square & octagon
- C. octagon & quadrilateral
- D. quadrilateral & rectangle



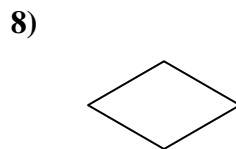
- A. rectangle & heptagon
- B. rectangle & octagon
- C. quadrilateral & triangle
- D. hexagon & triangle



- A. quadrilateral & octagon
- B. hexagon & rectangle
- C. square & quadrilateral
- D. hexagon & heptagon



- A. triangle & quadrilateral
- B. octagon & quadrilateral
- C. heptagon & rectangle
- D. quadrilateral & heptagon



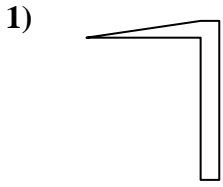
- A. rectangle & octagon
- B. pentagon & octagon
- C. heptagon & rectangle
- D. triangle & triangle

- 1. _____
- 2. _____
- 3. _____
- 4. _____
- 5. _____
- 6. _____
- 7. _____
- 8. _____

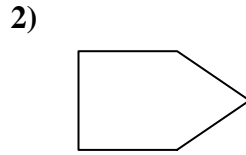


Determine which letter BEST represents the shapes that were used to create the figure shown.

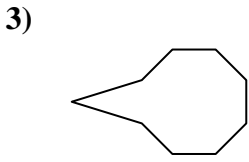
Answers



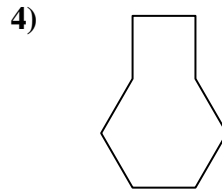
- A. hexagon & triangle
- B. rectangle & square
- C. hexagon & quadrilateral
- D. quadrilateral & triangle



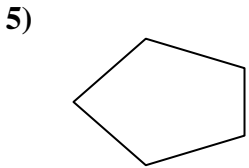
- A. hexagon & square
- B. heptagon & pentagon
- C. hexagon & rectangle
- D. square & triangle



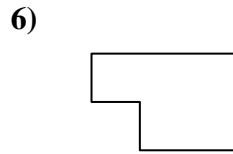
- A. square & triangle
- B. pentagon & quadrilateral
- C. triangle & octagon
- D. square & octagon



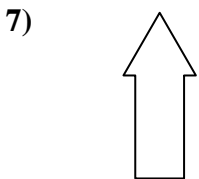
- A. quadrilateral & hexagon
- B. square & octagon
- C. octagon & quadrilateral
- D. quadrilateral & rectangle



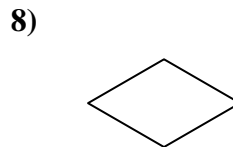
- A. rectangle & heptagon
- B. rectangle & octagon
- C. quadrilateral & triangle
- D. hexagon & triangle



- A. quadrilateral & octagon
- B. hexagon & rectangle
- C. square & quadrilateral
- D. hexagon & heptagon



- A. triangle & quadrilateral
- B. octagon & quadrilateral
- C. heptagon & rectangle
- D. quadrilateral & heptagon



- A. rectangle & octagon
- B. pentagon & octagon
- C. heptagon & rectangle
- D. triangle & triangle

- 1. **D**
- 2. **D**
- 3. **C**
- 4. **A**
- 5. **C**
- 6. **C**
- 7. **A**
- 8. **D**